



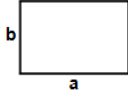


- 1)  Find perimeter of rectangle having sides  $a = 856$  m and  $b = 325$  m


Answer: \_\_\_\_\_

- 2)  Find perimeter of rectangle having sides  $a = 820$  cm and  $b = 648$  cm


Answer: \_\_\_\_\_

- 3)  Find perimeter of rectangle having sides  $a = 839$  ft and  $b = 447$  ft

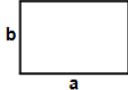
Answer: \_\_\_\_\_

- 4)  Find perimeter of rectangle having sides  $a = 949$  in and  $b = 150$  in


Answer: \_\_\_\_\_

- 5)  Find perimeter of rectangle having sides  $a = 980$  in and  $b = 977$  in


Answer: \_\_\_\_\_

- 6)  Find perimeter of rectangle having sides  $a = 479$  in and  $b = 401$  in

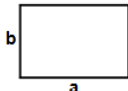
Answer: \_\_\_\_\_

- 7)  Find perimeter of rectangle having sides  $a = 905$  in and  $b = 755$  in


Answer: \_\_\_\_\_

- 8)  Find perimeter of rectangle having sides  $a = 308$  ft and  $b = 298$  ft


Answer: \_\_\_\_\_

- 9)  Find perimeter of rectangle having sides  $a = 961$  in and  $b = 810$  in

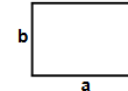
Answer: \_\_\_\_\_

- 10)  Find perimeter of rectangle having sides  $a = 864$  in and  $b = 858$  in

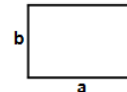
Answer: \_\_\_\_\_

- 11)  Find perimeter of rectangle having sides  $a = 764$  m and  $b = 674$  m

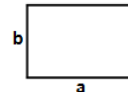
Answer: \_\_\_\_\_

- 12)  Find perimeter of rectangle having sides  $a = 998$  m and  $b = 997$  m

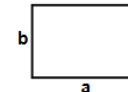
Answer: \_\_\_\_\_

- 13)  Find perimeter of rectangle having sides  $a = 353$  ft and  $b = 295$  ft

Answer: \_\_\_\_\_

- 14)  Find perimeter of rectangle having sides  $a = 696$  in and  $b = 491$  in

Answer: \_\_\_\_\_

- 15)  Find perimeter of rectangle having sides  $a = 471$  m and  $b = 316$  m

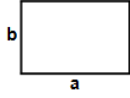
Answer: \_\_\_\_\_

Name: \_\_\_\_\_

March 26, 2024



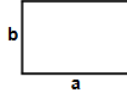
16)



Find perimeter of rectangle having sides  $a = 773$  cm and  $b = 712$  cm

Answer: \_\_\_\_\_

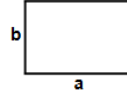
17)



Find perimeter of rectangle having sides  $a = 717$  ft and  $b = 567$  ft

Answer: \_\_\_\_\_

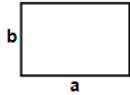
18)



Find perimeter of rectangle having sides  $a = 926$  cm and  $b = 653$  cm

Answer: \_\_\_\_\_

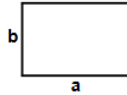
19)



Find perimeter of rectangle having sides  $a = 774$  cm and  $b = 378$  cm

Answer: \_\_\_\_\_

20)



Find perimeter of rectangle having sides  $a = 982$  ft and  $b = 864$  ft

Answer: \_\_\_\_\_

**Total: \_\_\_\_ / 20**

Name: \_\_\_\_\_

March 26, 2024

**Sr: 26032024-3548**

# MATHS WORKSHEET

GENERATOR

**11-PLUS  
SATS  
GCSES**



## Answers:

- |           |            |            |            |            |            |            |
|-----------|------------|------------|------------|------------|------------|------------|
| 1) 2362m  | 2) 2936cm  | 3) 2572ft  | 4) 2198in  | 5) 3914in  | 6) 1760in  | 7) 3320in  |
| 8) 1212ft | 9) 3542in  | 10) 3444in | 11) 2876m  | 12) 3990m  | 13) 1296ft | 14) 2374in |
| 15) 1574m | 16) 2970cm | 17) 2568ft | 18) 3158cm | 19) 2304cm | 20) 3692ft |            |